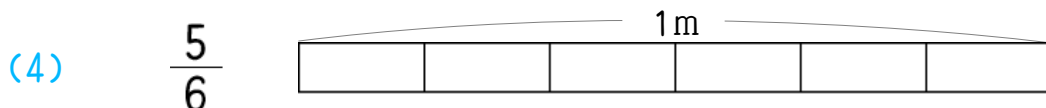
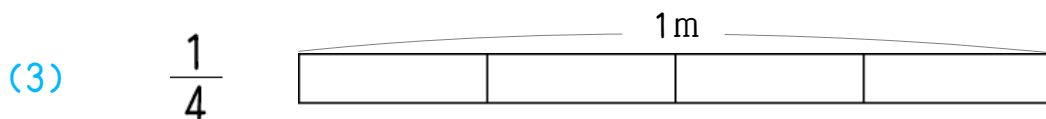
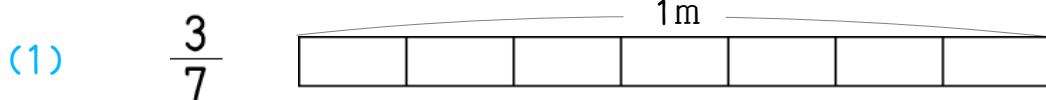


名前 _____

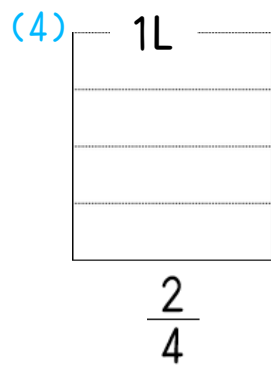
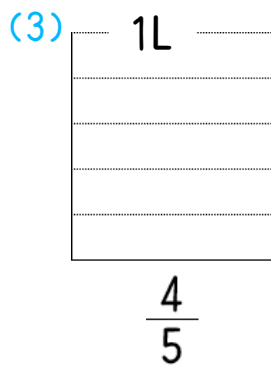
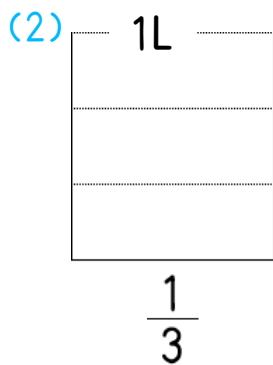
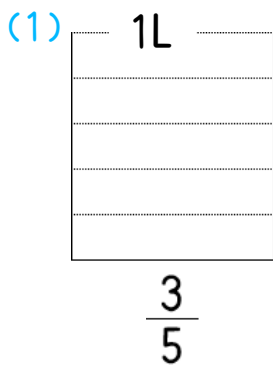
1

次の長さの分だけ色をぬりましょう。



2

次のかさの分だけ色をぬりましょう。



3

次の分数の大きさを、等号、不等号を使って表しましょう。

(1) $\frac{3}{4}$ $\frac{2}{4}$

(2) $\frac{3}{5}$ $\frac{1}{5}$

(3) $\frac{1}{3}$ $\frac{2}{3}$

(4) $\frac{5}{6}$ 1

(5) $\frac{5}{7}$ $\frac{5}{7}$

(6) $\frac{2}{2}$ 1