




名前 _____

1

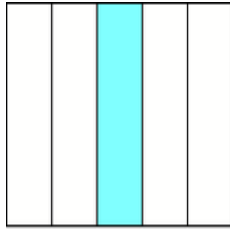
もとの大きさの 何分の一でしょう。

(1)



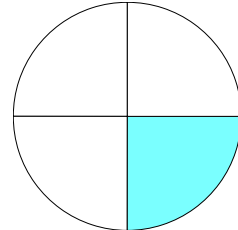
()

(2)



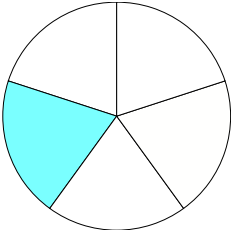
()

(3)



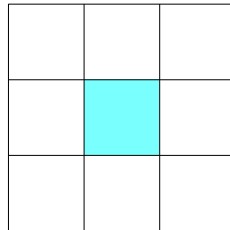
()

(4)



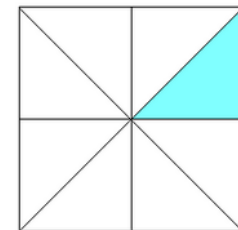
()

(5)



()

(6)

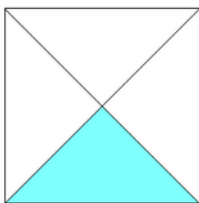


()

2


もとの大きさの 何分の一 になっている ものには ○,
なっていない ものには × を つけましょう。

(1)



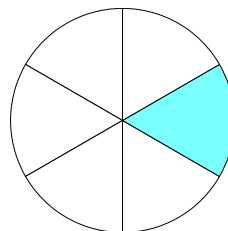
()

(2)




()

(3)



()

(4)



()